



Dilations Lesson 2: Perimeters & Areas

Name _____

Student Activity



Class _____

In this lesson, you will investigate the relationship between the perimeters and areas of dilated triangles and their ratios.

Open the document: *Dilations.tns*.

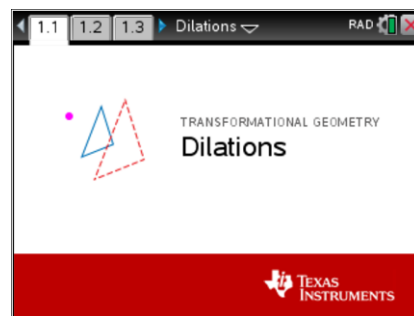
PLAY INVESTIGATE EXPLORE DISCOVER

It is important that the Dilations Tour be done before any Dilations lessons.

Move to page 1.3.

On the handheld, press **ctrl** **▶** and **ctrl** **◀** to navigate through the pages of the lesson.

On the iPad®, select the page thumbnail in the page sorter panel.



1. a. Press **menu** to open the menu on the handheld.

(On the iPad, tap on the wrench icon  to open the menu.)

Press **1** (1: Templates) then **2** (2: Perimeters & Areas).

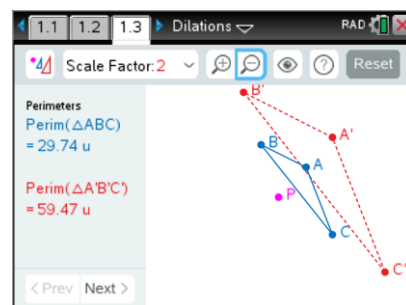
- b. Dilate $\triangle ABC$ about point P with a Scale Factor of 2

( or **D**). Zoom  in (**+**) or out (**-**) as needed.

Observe.

Record the *Original* perimeters (*first perimeters displayed*) in the first row of the table below.


Discuss in your groups the meaning of the 'perimeter of a triangle.'



2. a. Investigate perimeters by grabbing and moving each of the three vertices of $\triangle ABC$ to create different shaped triangles. Try to make one of the perimeters a whole number. Record the data.
- b. Move point P and record the perimeters in the table.

Scale Factor = 2	Perimeter ($\triangle ABC$)	Perimeter ($\triangle A'B'C'$)
Original		
Figure 1		
Figure 2		

3. Make a **conjecture** about the perimeters of a triangle and its image under a dilation about a point. (A **conjecture** is an opinion or conclusion based upon what is observed.)

4. Reset the page (**Reset** or **ctrl** followed by **del**). Change the scale factor to 3 by pressing **Scale Factor: 2**  (**x**) and use the directional arrows (**▲ ▼ ◀ ▶**) on the touchpad to select the





Dilations Lesson 2: Perimeters & Areas








Name _____

Student Activity



Class _____

Scale Factor 3, then press  or .












Dilate $\triangle ABC$ with the scale factor chosen ( or ). Zoom   in () or out () as needed. Advance to the 'Areas' data by pressing Next () (right parenthesis key).



Observe. Record the *Original* areas (*first areas displayed*) in the first row of the following table.





5. a. Investigate areas by grabbing and moving each of the three vertices of $\triangle ABC$ to create different shaped triangles. Record the area data. Discuss in your groups the meaning of the 'area' of a triangle.
- b. Move point P and record the areas in the table.


Scale Factor = 3	Area ($\triangle ABC$)	Area ($\triangle A'B'C'$)
Original		
Figure 1		
Figure 2		


6. Make a conjecture about the areas of a triangle and its image under a dilation about a point.

7. Reset the page ( or  followed by ). To validate the conjectures, change the scale factor to 4 by pressing  () and use the directional arrows (   ) on the touchpad to select Scale Factor 4, then press  or .

Dilate $\triangle ABC$ about point P with a Scale Factor of 4 ( or ).

Zoom   in () or out () as needed.

Advance to the 'Ratio of Perimeters' ('Perim ($\triangle A'B'C'$) / Perim ($\triangle ABC$)') data by pressing Next (). Observe. Record the *Original* ratios of the perimeters (*first ratios displayed*) in the table on the next page.

8. a. Investigate the Ratios of Perimeters by grabbing and moving each of the three vertices of $\triangle ABC$ to create different shaped triangles. Record the ratios of the perimeters for each triangle in the table.
- b. Move point P and record the ratios of the perimeters in the table.
- c. Advance to the 'Ratio of Areas' ('Area ($\triangle A'B'C'$) / Area ($\triangle ABC$)') data by pressing Next () twice. Record the Original ratios of the areas (*first ratios displayed*) in the table on the next page.



Dilations Lesson 2: Perimeters & Areas

Name _____

Student Activity












Class _____







- d. Investigate the ratios of the areas by grabbing and moving each of the three vertices of $\triangle ABC$ to create different shaped triangles. Move point P as well.



Record the ratios of the areas for each triangle in the table below.

Scale Factor = 4	$\frac{Perim(\triangle A'B'C')}{Perim(\triangle ABC)}$	$\frac{Area(\triangle A'B'C')}{Area(\triangle ABC)}$
Original		
Figure 1		
Figure 2		
Figure 3		

9. Reset the page ( or  followed by ). Repeat the earlier investigation for the ratios of perimeters and areas but using a different scale factor than 2 or 4. If working with a partner or in a group, each person should choose a different scale factor. If working on your own, use a scale factor of 1/2.

To change the scale factor, press  () and use the directional arrows (   ) on the touchpad to select the scale factor, then press  or  .

Dilate $\triangle ABC$ with the scale factor chosen ( or ). Zoom   in () or out () as needed.

- a. Create different triangles as before by grabbing and moving vertices and point P. Record the ratios of the perimeters and the ratios of the areas for three different figures. Use the Next () and Prev () buttons to access the desired data.
- b. Record the scale factor here: **Scale Factor** = _____ and the ratios in the table below.

	$\frac{Perim(\triangle A'B'C')}{Perim(\triangle ABC)}$	$\frac{Area(\triangle A'B'C')}{Area(\triangle ABC)}$
Figure 1		
Figure 2		
Figure 3		

If the ratios are expressed as decimals, also write the ratios as their fraction equivalents.

Based upon the entries in the table, write at least two conjectures about what you have observed.

Compare your results with your classmates.



10. Advance to the 'Scale Factor' data by pressing Next (\square).

What do you notice on this page? How does this compare with your conjectures?

Discuss in your groups.

11. Suppose that $\triangle DEF$ were dilated about point P with a scale factor of 5.

a. $\frac{Perim(\triangle D'E'F')}{Perim(\triangle DEF)} = \underline{\hspace{2cm}}$

b. $\frac{Area(\triangle D'E'F')}{Area(\triangle DEF)} = \underline{\hspace{2cm}}$

c. $\frac{Perim(\triangle DEF)}{Perim(\triangle D'E'F')} = \underline{\hspace{2cm}}$

12. Suppose that $\triangle DEF$ were dilated about point P with a scale factor of $\frac{1}{3}$.

a. $\frac{Perim(\triangle D'E'F')}{Perim(\triangle DEF)} = \underline{\hspace{2cm}}$

b. $\frac{Area(\triangle D'E'F')}{Area(\triangle DEF)} = \underline{\hspace{2cm}}$

c. $\frac{Perim(\triangle DEF)}{Perim(\triangle D'E'F')} = \underline{\hspace{2cm}}$

13. What is the relationship between the ratios of the perimeters and the scale factor of dilated images? Explain your answer.

14. What is the relationship between the ratios of the areas and the scale factor of dilated images? Explain your answer.